

GWALIOR GLORY SCHOOL

Class : V

SUMMER HOLIDAY HOMEWORK ENGLISH (2024-25)

Name : _____ Sec. : _____ Roll No. : _____ Date : _____

#. Vocabulary Enrichment!

Q1. Prepare a dictionary having minimum 5 words of each letter (New words) with meaning to enhance the vocabulary. Cover it beautifully and put a bookmark in it with a moral value written on it.

#. Reading Skills!

Q2. 'The world belongs to those who read.' So, to inculcate good reading habits, read about anyone of the following authors. Write about them in 250 words, paste their pictures and also write about the popular books written by them. Present your work in a creative manner in a self-made folder!

(i) Sudha Murthy

(ii) R.K. Narayan

(iii) Ruskin Bond

#. My Creative Corner!

Q3. Prepare a beautiful chart on the given topic (according to your roll number) and submit it by 15th July'24.

(i) Parts of speech (Roll No. 1 to 6)

(ii) Types of sentences (Roll No. 7 to 12)

(iii) Countable and Uncountable nouns (Roll No. 13 to 18)

(iv) Preposition of Place (Roll No. 19 to 23)

Note: Be as creative as you can! You can draw or paste pictures and use different style of writing too.

Q4. An idiom is a phrase or an expression that has a figurative meaning. A list of idioms is given here, find out their meanings and write in the space provided.

No.	Idiom	Meaning
1.	give it a shot	
2.	speak your mind	
3.	cross your fingers	
4.	draw a blank	
5.	get your act together	
6.	be in the same boat	
7.	read between the lines	
8.	a piece of cake	
9.	slip one's mind	
10.	a blessing in disguise	

Q5. Reading comprehension:- Read the passage and answer the questions.

THE HISTORY OF ANTS

Ants are insects that we find everywhere. They may be in your home, under your school desk, in the bathroom or in the grass during a picnic. There are more than 12,000 types of ants all around the world.

In a colony there are three types of ants. These are the queen, the males and the female workers. A colony can also have more than one queen. The male ants and the queen both have wings, but workers don't. Soldier ants protect the queen ant and the colony. They also collect food and take care of the colony.

The job of the queen ant is to lay eggs for the rest of her life. Some queen ants can live up to several years and have million babies! When the queen of the ant colony dies, the colony does not survive for long.

Ants don't have ears; they listen to the vibrations through their little feet. Ants breathe through tiny holes in their entire body because they don't have lungs like us human beings. When ants are looking for food, they leave chemical trails so that they know where all they have already been.

Did you know that an ant can lift 20 times its own weight? This means that if a second grade student was an ant, they would be able to pick up a car!

Answer the following questions:-

1. **What do the soldier ants do?** _____
 - a) Protect the queen
 - b) Protect the colony
 - c) Collect food
 - d) All of the above

2. **What happens when the queen ant dies?** _____
 - a) The colony doesn't survive
 - b) One of the female workers becomes the queen
 - c) The soldier ants take over
 - d) None of the above

3. **How do the ants breathe?**

4. **What do they do when they are looking for food?**

5. **How do the ants hear without any ears?**

**Q6. Use the given suffix to form two new abstract nouns.
(Examples are given for reference)**

No.	Suffice	Example	<u>ABSTRACT NOUN</u>
1.	- ness	happiness	_____
2.	- ment	appointment	_____
3.	- ance	assurance	_____
4.	- sion	decision	_____
5.	- hood	childhood	_____
6.	- ence	silence	_____
7.	- ity	possibility	_____
8.	- ship	relationship	_____

Q7. Observe the picture carefully and write a short paragraph (80-100 words) about it. Give a suitable title too!

Title: _____



GWALIOR GLORY SCHOOL

SUMMER HOLIDAY HOMEWORK

HINDI (2024-25)

Class : V

Name : _____ Sec. : _____ Roll No. : _____ Date : _____

(1) निम्नलिखित गद्यांश को पढ़कर नीचे लिखे प्रश्नों के उत्तर दीजिए।

तिलक के स्वतंत्र एवं उग्र विचारों से रुष्ट होकर अंग्रेज सरकार इन्हें बार-बार जेल में डालती रही। सन् 1907 में इन्होंने सिंह गर्जना की "स्वराज मेरा जन्म सिद्ध अधिकार है और मैं उसे लेकर रहूँगा"। ब्रिटिश सरकार द्वारा इन पर राजद्रोह का मुकदमा चलाया गया और छः वर्ष की सजा देकर माण्डले (म्याँमार) जेल में डाल दिया। जहाँ इन्होंने तीन पुस्तकों की रचना की— 'गीता रहस्य', 'ओरियन', आर्कटिक होम इन वेदाङ्ग'।

प्र01 उपरोक्त गद्यांश का उचित शीर्षक दीजिए।

उ0 _____

प्र02 तिलक को जेल में क्यों डाला गया?

उ0 _____

प्र03 जेल में तिलक ने किन-किन पुस्तकों की रचना की?

उ0 _____

प्र04 'सजा' शब्द का समानार्थी शब्द लिखिए।

उ0 _____

प्र05 'स्वतंत्र' शब्द का विलोम शब्द लिखिए।

उ0 _____

(2) नीचे बनी वर्ग पहेली से निम्नलिखित शब्दों के दो-दो पर्यायवाची शब्द छाँटिए और लिखिए।

1) आकाश _____

2) कमल _____

3) दिन _____

4) फूल _____

5) घर _____

न	ज	ल	ज	सु
ग	भ	र	वा	म
ग	नी	भ	र	न
न	दि	व	स	ष्
स	द	न	पु	क

- (3) जन्मदिन पर पिताजी की ओर से लिखे आमंत्रण पत्र को पढ़ें तथा उसमें अपना नाम, पिताजी का नाम, स्थान तथा जन्मतिथि को भरिए—

आमंत्रण पत्र

मान्यवर,

ईश्वर की असीम अनुकंपा से मेरे पुत्र/पुत्री _____ (नाम)
का आज दिनांक _____ को _____ वाँ जन्मदिवस मनाया जा रहा है,
जिसमें उसकी लंबी उम्र की प्रार्थना हेतु हम सत्संग का आयोजन कर रहे हैं। जिसमें
आप सपरिवार सादर आमंत्रित हैं।


स्थान _____

दर्शनाभिलाषी

प्रति, _____

(पिता का नाम)

- (4) 'वृक्ष' विषय पर 5 वाक्य लिखिए।



(5) दिए गए मुहावरों को उनके अर्थ के साथ डिक्शनरी फार्म में लिखिए—

आँखें दिखाना

उल्लू बनाना

गद्गद होना

बाल बाँका न होना

आँख फाड़कर देखना

काला अक्षर भैंस बराबर

फूला न समाना

इधर—उधर की हाँकना

पेट में चूहे कूदना

सिर ऊँचा करना

(1)

(2)

(3)

(4)

(5)

(6)

(7)

(8)

(9)

(10)

(5) दिए गए मुहावरों को उनके अर्थ के साथ डिक्शनरी फार्म में लिखिए—

आँखें दिखाना

उल्लू बनाना

गद्गद होना

बाल बाँका न होना

आँख फाड़कर देखना

काला अक्षर भैंस बराबर

फूला न समाना

इधर—उधर की हाँकना

पेट में चूहे कूदना

सिर ऊँचा करना

(1)

(2)

(3)

(4)

(5)

(6)

(7)

(8)

(9)

(10)

GWALIOR GLORY SCHOOL

SUMMER HOLIDAY HOMEWORK MATHEMATICS (2024-25)

Class : V

Name : _____ Sec. : _____ Roll No. : _____ Date : _____

1) Here are some important events that happened in the history of India.

Rewrite the year of events in Roman Numbers.

- a) Mahatma Gandhi was born _____
- b) Dandi March _____
- c) Independent India _____
- d) Kargil War _____

2) The different distances travelled by different animals of the cat family are given below change the speed given to kilometer per hour and find the fastest of them all.

	Distance and time	Speed in km / hour
Cat	24 km in 30 min	
Lion	160 km in 2 hours	
Leopard	232 km in 4 hours	
Tiger	130 km in 2 hours	
Jaguar	240 km in 3 hours	
Cheetah	65 km in 30 min	

Fastest animal is _____

- 3) You all love to play the sports like cricket football, hockey etc. Let's learn more about your favourite sport.

Sport of your choice	Number of players in a team	Shape of the field	Length of the field	Width of the field

Draw the field in the given space.

- 4) Fill the grid with numbers 1 to 50 and follow the steps to find prime and composite numbers.

a) Colour the box of 1 as it is a unique numbers.

b) Circle 2 and cross all the numbers divisible by 2.

c) Circle 3 and cross all the numbers divisible by 3.

d) Circle 5 and cross all the numbers divisible by 5.

e) Circle 7 and cross all the numbers divisible 7.

1				
				50

Now circle the numbers that are not crossed out.

All the circled numbers are prime numbers the crossed numbers are composite numbers.

5) Use the chart and find the sums:-

	A	B	C	D	E
V	1	2	3	4	5
W	6	7	8	9	10
X	11	12	13	14	15
Y	16	17	18	19	20
Z	21	22	23	24	25

- a) The sum of odd numbers in column B _____.
- b) The sum of prime numbers in row X _____.
- c) Add the sum of multiples of 2 in column A and multiples of 5 in row Z _____.

6) Solve and find the way:-

a. $7 \times 5 = 40$

a. $8 \times 9 = 73$

a. $7 \times 8 = 54$

b. $9 \times 6 = 53$

b. $7 \times 8 = 56$

b. $8 \times 8 = 63$

c. $7 \times 7 = 49$

c. $9 \times 4 = 27$

c. $8 \times 7 = 56$

Choose the right path by using your answers above.

abc cba cbc

Add your answers and circle the right choice.

161 172

7) Study the train time table and answer the questions that follow:-

Train No.	Train Name	Station Point	Departure Time	Destination	Arrival Time
14095	Himalyan Queen	Delhi	0545 hrs.	Kalka	1110 hrs.
12011	Kalka Shatabdi	New Delhi	0740 hrs.	Kalka	1145 hrs.
12925	Pashchim Express	New Delhi	1115 hrs.	Kalka	1645 hrs.
12005	Kalka Shatabdi	New Delhi	1715 hrs.	Kalka	2120 hrs.
12311	Howrah Delhi Kalka Mail	Delhi	2115 hrs.	Kalka	0430 hrs.

- 1) Which train leave in the morning? _____
- 2) Which is the fastest train? _____
- 3) How many train leave from New Delhi station? _____
- 4) How long does the Howrah Mail take? _____
- 5) If Shalu wants to have dinner after she reaches Kalka. Which train should she take? _____

8) Let's have fun:-



- ◆ Use a crayon to loop sets of two or more added ____ that total exactly 20. The sets can be horizontal, vertical, or diagonal. Use lots of different colors to make your sets easier to count.

8	16	1	3	8	9
10	10	7	3	10	7
2	6	12	18	4	4
8	4	8	2	6	3
3	5	11	1	14	6
7	5	1	19	2	7

GWALIOR GLORY SCHOOL

SUMMER HOLIDAY HOMEWORK SANSKRIT (2024-25)

Class : V

Name : _____ Sec. : _____ Roll No. : _____ Date : _____

(1) दिए गए चित्रों को देखकर संस्कृत भाषा में उनके नाम लिखिए।







(2) दिए गए चित्रों को देखकर पुल्लिङ्ग शब्दों के एकवचन और बहुवचन रूप लिखिए।











(3) पाठ्य पुस्तक में (पेज नं. 168) दिए गए 'वन्दना' के श्लोक याद कीजिए।

(4) निम्नलिखित में वर्ण विच्छेद और वर्ण संयोजन कीजिए।

(क) तौ = _____ + _____ (घ) म् + ऐ = _____

(ख) कृ = _____ + _____ (ङ.) न् + ऋ = _____

(ग) सै = _____ + _____ (च) भ् + ओ = _____

(5) चित्रों को देखकर वर्ण-संयोजन कीजिए।

(क)



म् + अ + य् + ऊ
+ र् + अः

= _____

(ख)



क् + अ + प् + ओ
+ त् + अः

= _____

(ग)



क् + ओ + क् + इ
+ ल् + अः

= _____

(6) दिए गए चित्रों को देखकर हिंदी भाषा से संस्कृत भाषा में अनुवाद कीजिए।



छात्रा जाती है।

_____ |



छात्र लिखता है।

_____ |

GWALIOR GLORY SCHOOL

SUMMER HOLIDAY HOMEWORK ENVIRONMENTAL SCIENCE (2024-25)

Class : V

Name : _____ Sec. : _____ Roll No. : _____ Date : _____

NOTE: 1) Do any 1 project out of Project-1 and Project-2.

2) Submit it in neat hand made folder. It will be marked for Term-1.

PROJECT-1

- 1) Make a project report on any 10 type of snakes found in India. Write their name, region where they are found and 2-3 facts about them. Classify if they are poisonous or non-poisonous. [stick picture of each one of them]

OR

PROJECT-2

- 2) Project report – Make a report on any 4 natural disaster. Mention the cause of the disaster and the preventive measures to be taken at that time. [stick picture of each disaster]

Note: Do all question (Q.3, 4, 5)

- 3) Make a chart of 2 days eating schedule. Mention the entire schedule of what you have taken from breakfast to dinner, their source and ingredients used.

Use the format given below:


Meals	BREAKFAST	INGREDIENTS	SOURCE
<u>BREAKFAST</u>	DAY-1		
	DAY-2		
<u>LUNCH</u>	DAY-1		
	DAY-2		
<u>DINNER</u>	DAY-1		
	DAY-2		

- 4) Make a road map from your home to school. Mention all the important landmarks that come on your way.

[HINT:- Use different sign and symbols to highlight the landmark]



Hospital



Railway track




Bridge



Restaurant etc.

- # Students can make their own symbol to mention building, traffic signals, park, temple etc.



- 5) On A4 sheet, Paste picture of Kalpana Chawla or Sunita Williams and gather information about her and write atleast 2 paragraphs on their journey of achievements etc.

GWALIOR GLORY SCHOOL

SUMMER HOLIDAY HOMEWORK

GK (2024-25)

Class : V






Name : _____ Sec. : _____ Roll No. : _____ Date : _____

1) First in the world:-

- a) The first country to print book _____
- b) First person in the space _____
- c) The first country to launch artificial satellite in the space _____
- d) The first person to sail around the world _____
- e) The first country to prepare constitution _____

2) LOGO QUIZ:-

Identify the logo & write the name of brand and the product manufactured.

<u>LOGO</u>	<u>NAME</u>	<u>PRODUCT</u>
	_____	_____
	_____	_____
	_____	_____
	_____	_____
	_____	_____

3) FUN TIME: Two questions but one answer.


- a) A soap brand _____ a musical instrument.
- b) A mobile brand _____ fruit name.
- c) Name of a tree _____ tooth paste.
- d) A watch brand _____ resident of a country.
- e) A fruit _____ name of a shoe polish

- f) A famous monument _____ a tea brand.
- g) Name of a fuel _____ clothing brand.
- h) A mountain range _____ a mineral water brand.
- i) Pencil brand _____ lord of dance.
- j) A bulb brand _____ source of energy.

4) Sports word search:-

V U R J P A J T R S
 V F O O T B A L L P
 Q I N I E O N T U X
 R S H K N R Y Z M S
 U H T R N Y W N X K
 G W P D I V E X Z I
 B Q Y O S U R F L I
 Y B S K F T E V T R
 S K A T E B O A R D
 B A S K E T B A L L
 P D W S T V H R A P
 V J I S D A N C E L
 C U M Q N O L Q A P
 X U G H E R Y O G A

1. SWIM
2. SKATEBOARD
3. TENNIS
4. BASKETBALL
5. SKII
6. FISH
7. DANCE
8. FOOTBALL
9. SURF
10. DIVE
11. YOGA
12. RUGBY



5) **3 Words game: Think of 3 words that**

- 1) Start with ST _____
- 2) End in er _____
- 3) Which rhyme with spoon _____

6) **HIDDEN ANIMALS: Find the animals hiding in the following sentences:**

Example – Close the door at once.

- 1) We will go at two o'clock.
- 2) It's only a kilometer away.
- 3) That will be a real help.
- 4) If I shout, he'll hear me.
- 5) She came late every day.

7) **Using the below codes, decode the messages given below:-**

A	B	D	E	H	M	U	R	Y	I
84	126	91	77	63	24	102	70	28	50

- 1) I am one among 29 capital cities of the states of India. I belong to the period of Nizams. You can get me by multiplying the given digits with 7.

9 4 13 11 10 12 18 12 13


Ans. _____

- 2) I am known as the city of dreams. I am also the commercial capital of India. You can get me by multiplying the given digits with 2.

12 51 12 63 42 25

Ans. _____

8) Paste the picture of any musical instrument and write four lines about it.



- 1) _____
- 2) _____
- 3) _____
- 4) _____
- 5) _____

GWALIOR GLORY SCHOOL

Class : V

SUMMER HOLIDAY HOMEWORK (2024-25)

Art & Craft

Name : _____ Sec. : _____ Roll No. : _____ Date : _____

CRAFT:

- 1) Make five creative "bookmark".
- 2) Make a brown paper bag and decorative. (example-1 given below)

ART:

- 1) Draw "Mandala art" and fill colouring. (example-2 given below)
- 2) Draw a poster "Save Electricity" (Roll No. 1 to 12)
- 3) Draw a poster "Save Earth" (Roll No. 13 to 23)
- 4) Draw and colouring "Fair picture"

NOTE: Art work should be done in drawing notebook.



Example-1



Example-2

GWALIOR GLORY SCHOOL

Class : V

SUMMER HOLIDAY HOMEWORK COMPUTER (2024-25)

Name : _____ Sec. : _____ Roll No. : _____ Date : _____

- ◆ Prepare a creative PPT- Power Point Presentation on Surya Namaskar with its introduction and the significance of each step.
-

GWALIOR GLORY SCHOOL

Class : V

SUMMER HOLIDAY HOMEWORK COMPUTER (2024-25)

Name : _____ Sec. : _____ Roll No. : _____ Date : _____

- ◆ Prepare a creative PPT- Power Point Presentation on Surya Namaskar with its introduction and the significance of each step.
-

GWALIOR GLORY SCHOOL

Class : V

SUMMER HOLIDAY HOMEWORK COMPUTER (2024-25)

Name : _____ Sec. : _____ Roll No. : _____ Date : _____

- ◆ Prepare a creative PPT- Power Point Presentation on Surya Namaskar with its introduction and the significance of each step.
-

GWALIOR GLORY SCHOOL

Class : V

SUMMER HOLIDAY HOMEWORK COMPUTER (2024-25)

Name : _____ Sec. : _____ Roll No. : _____ Date : _____

- ◆ Prepare a creative PPT- Power Point Presentation on Surya Namaskar with its introduction and the significance of each step.